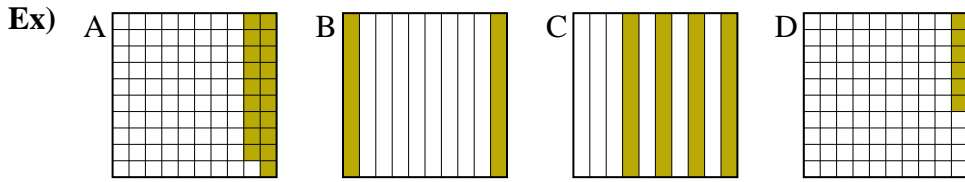




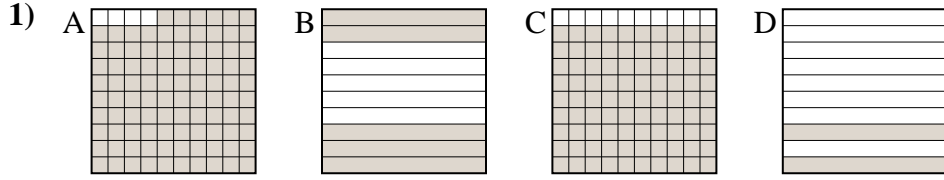
Put the boxes in order from least to greatest based on the shaded amount.

Answers



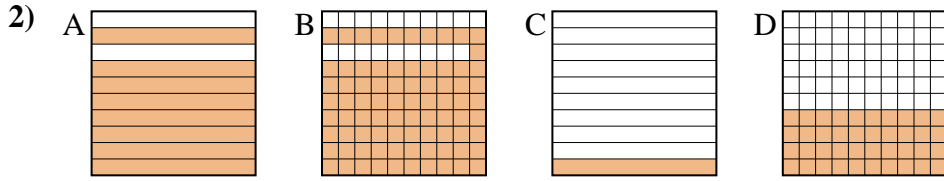
small 0.06 - D
0.19 - A
0.2 - B
 large 0.4 - C

Ex. **D,A,B,C**



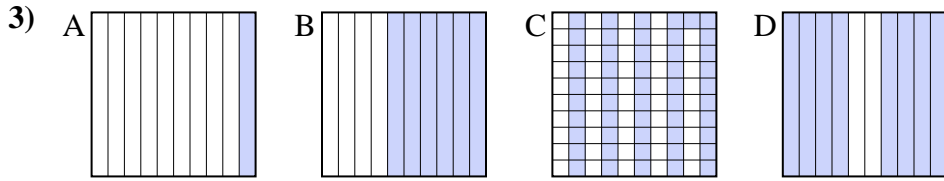
small _____

 large _____



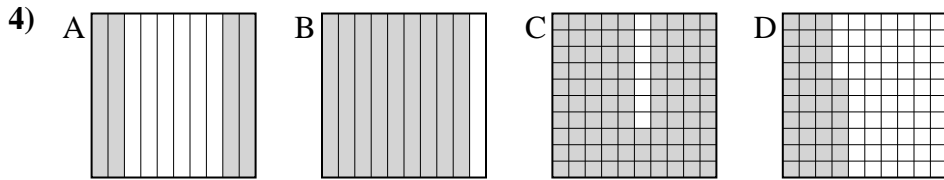
small _____

 large _____



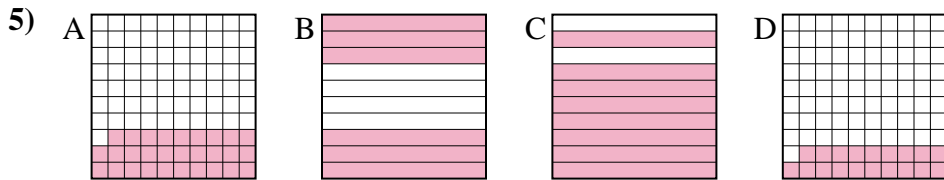
small _____

 large _____



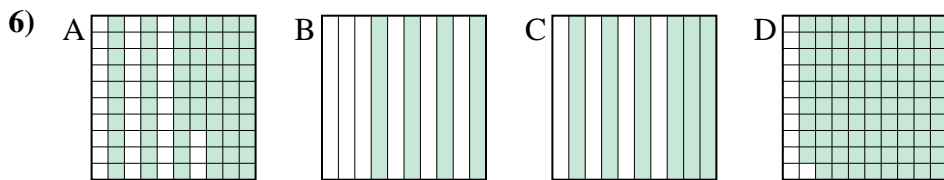
small _____

 large _____



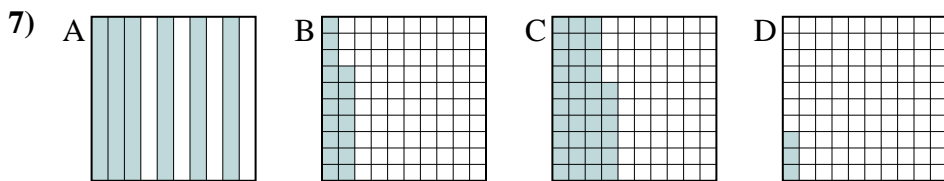
small _____

 large _____



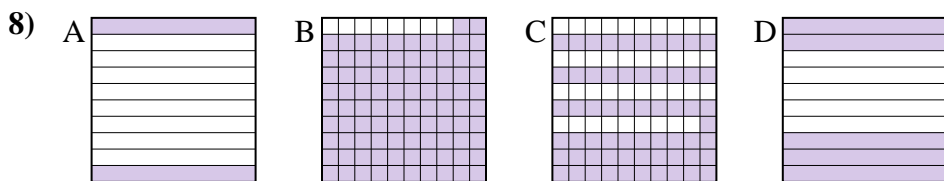
small _____

 large _____



small _____

 large _____



small _____

 large _____

1. _____
2. _____
3. _____
4. _____
5. _____
6. _____
7. _____
8. _____



Put the boxes in order from least to greatest based on the shaded amount.

Ex) A B C D

small 0.06 - D
0.19 - A
0.2 - B

large 0.4 - C

1) A B C D

small 0.2 - D
0.5 - B
0.9 - C

large 0.96 - A

2) A B C D

small 0.1 - C
0.4 - D
0.8 - A

large 0.81 - B

3) A B C D

small 0.1 - A
0.51 - C
0.6 - B

large 0.8 - D

4) A B C D

small 0.36 - D
0.4 - A
0.9 - B

large 0.93 - C

5) A B C D

small 0.19 - D
0.29 - A
0.6 - B

large 0.8 - C

6) A B C D

small 0.4 - B
0.6 - C
0.67 - A

large 0.89 - D

7) A B C D

small 0.03 - D
0.17 - B
0.36 - C

large 0.6 - A

8) A B C D

small 0.2 - A
0.5 - D
0.61 - C

large 0.92 - B

Answers

Ex. D,A,B,C

1. D,B,C,A

2. C,D,A,B

3. A,C,B,D

4. D,A,B,C

5. D,A,B,C

6. B,C,A,D

7. D,B,C,A

8. A,D,C,B